












Question	32×300	0.43×5000	33.07×70	123.6×800	3.008×6000
How many places do numbers move?	2 places	3 places	1 place	2 places	
Which direction will numbers move?					
Make the move in stages, lining up the decimal points.	$\begin{array}{r} 32. \\ 320. \\ 3200. \end{array}$	$\begin{array}{r} 0.43 \\ 4.3 \\ 43. \\ 430. \end{array}$	$\begin{array}{r} \\ \\ \\ \end{array}$	$\begin{array}{r} \\ \\ \\ \end{array}$	$\begin{array}{r} \\ \\ \\ \end{array}$
Do final multiplication or division	$\begin{array}{r} 3200 \\ \times 3 \\ \hline 9600 \end{array}$				

Multiplication by Multiples of 10, 100, 1000

Question	0.053 x 200	1.004 x 8000	28.91 x 30	574.6 x 700	0.00034 x 600,000
How many places do numbers move?					
Which direction will numbers move?					
Make the move in stages, lining up the decimal points.
Do final multiplication or division					

Question	$72 \div 300$	$450 \div 9000$	$19.2 \div 30$	$8.56 \div 400$	$9.927 \div 9000$
How many places do numbers move?	2 places	3 places	1 place	2 places	
Which direction will numbers move?					
Make the move in stages, lining up the decimal points.	$\begin{array}{r} 72. \\ 7.2 \\ 0.72 \end{array}$	$\begin{array}{r} 450. \\ 45.0 \\ 4.5 \\ 0.45 \end{array}$	$\begin{array}{r} \\ \\ \\ \end{array}$	$\begin{array}{r} \\ \\ \\ \end{array}$	$\begin{array}{r} \\ \\ \\ \end{array}$
Do final multiplication or division	$\begin{array}{r} 0.24 \\ 3 \overline{) 0.72} \end{array}$				

Question	$701.2 \div 400$	$0.038 \div 50$	$284 \div 4000$	$24.3 \div 5000$	$0.038 \div 500$
How many places do numbers move?					
Which direction will numbers move?					
Make the move in stages, lining up the decimal points.					
Do final multiplication or division					

Question	$1.4 \div 700$	0.103×300	$9927 \div 90$	21.402×9000	$2.9 \div 2000$
How many places do numbers move?					
Which direction will numbers move?					
Make the move in stages, lining up the decimal points.	⋮	⋮	⋮	⋮	⋮
Do final multiplication or division					